


KS3 Geography
India



NAME

Suggested Timing: 1 hour

Please complete all questions in this paper to the best of your ability.

You should spend no more than 1 hour completing this paper.

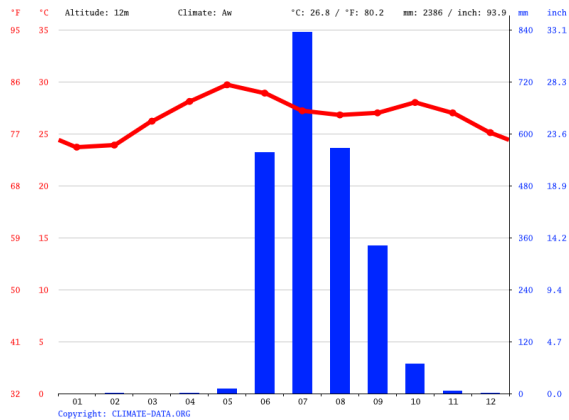
Use the marks shown after each question ([x]) to give you an idea of how much to write for each answer. 1-mark answers do not need any explanation or much detail whereas higher-marked questions require a higher amount of detail.

When asked to **explain**, aim to make a point or suggest an idea and then explain what that means or *why* it is a good point, in detail.

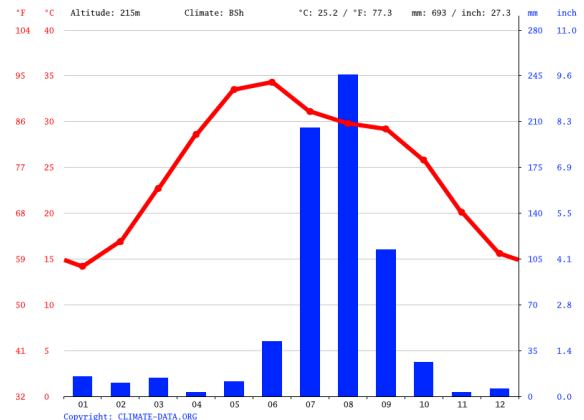
When you have completed the assessment you can use the mark scheme (sent with this paper) to find your KS3 level. Alternatively, you can answer the paper and then either scan or photo the pages and send them to me for marking at humanateestutor@gmail.com.

The deadline for submission of this assessment is **Friday 23rd April** and I'll be marking the papers and returning them on the 24th April.

1. Two climate graphs for New Delhi and Mumbai.



New Delhi



Mumbai

(a) What is the average temperature in New Delhi in May?

..... [1]

(b) Which city, New Delhi or Mumbai, has the most rainfall in August?

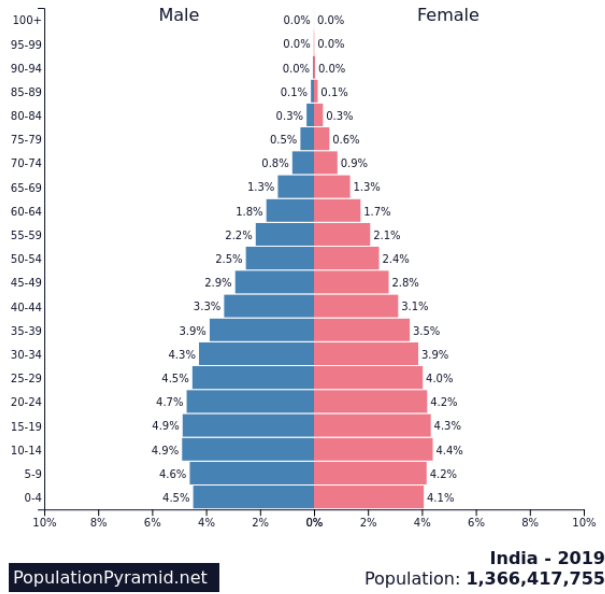
..... [1]

(c) Which two months have the least average rainfall in Mumbai?

.....
 [2]

[Total: 4]

2. A population pyramid for India.



(a) What percentage of Indians are aged between 10-14?

..... [1]

(b) Explain **TWO** reasons why there are more males than females in India.

.....

.....

.....

.....

.....

.....

.....

..... [4]

[Total: 5]

3. This is a photograph of an industrial area in India.



(a) Give one cause of air pollution in India?

..... [1]

(b) Explain **TWO** problems that air pollution causes in India.

.....
.....
.....
.....
.....
.....
.....
.....
..... [4]

[Total: 5]

