


KS3 Geography
Women Around the World



NAME

Suggested Time: 1 hour

Please complete all questions in this paper to the best of your ability.

You should spend no more than 1 hour completing this paper.

Use the marks shown after each question ([x]) to give you an idea of how much to write for each answer. 1-mark answers do not need any explanation or much detail whereas higher-marked questions require a higher amount of detail.

When asked to **explain**, aim to make a point or suggest an idea and then explain what that means or *why* it is a good point, in detail.

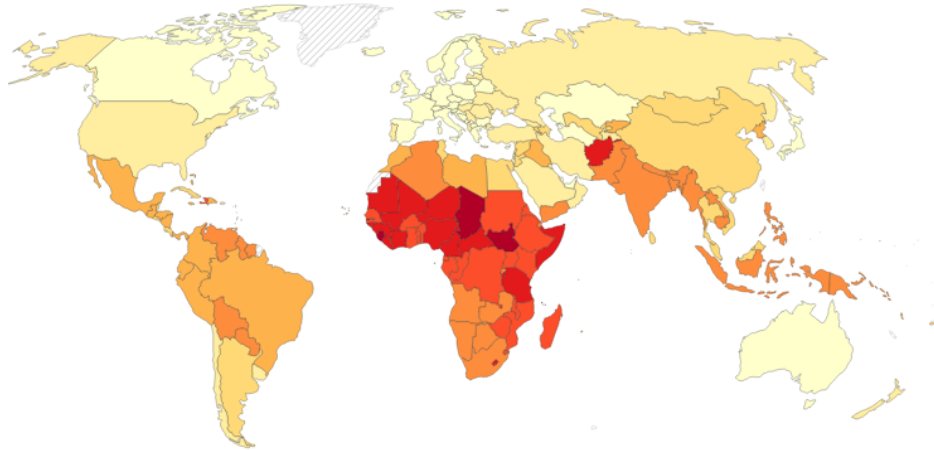
When you have completed the assessment you can use the mark scheme (sent with this paper) to find your KS3 level. Alternatively, you can answer the paper and then either scan or photo the pages and send them to me for marking at humanateestutor@gmail.com.

The deadline for submission of this assessment is **Friday 24th February** and I'll be marking the papers and returning them on the 25th February.

1. A Map Showing Maternal Mortality Ratios Worldwide.

Maternal mortality ratio, 2020

The maternal mortality ratio is the number of women who die from pregnancy-related causes while pregnant or within 42 days of pregnancy termination per 100,000 live births.



Source: Gapminder (2010); WHO (2019); OECD (2022)

OurWorldInData.org/maternal-mortality • CC BY

(a) What is the Maternal Mortality Ratio?

..... [1]

(b) Name one country with a ratio of 0-10.

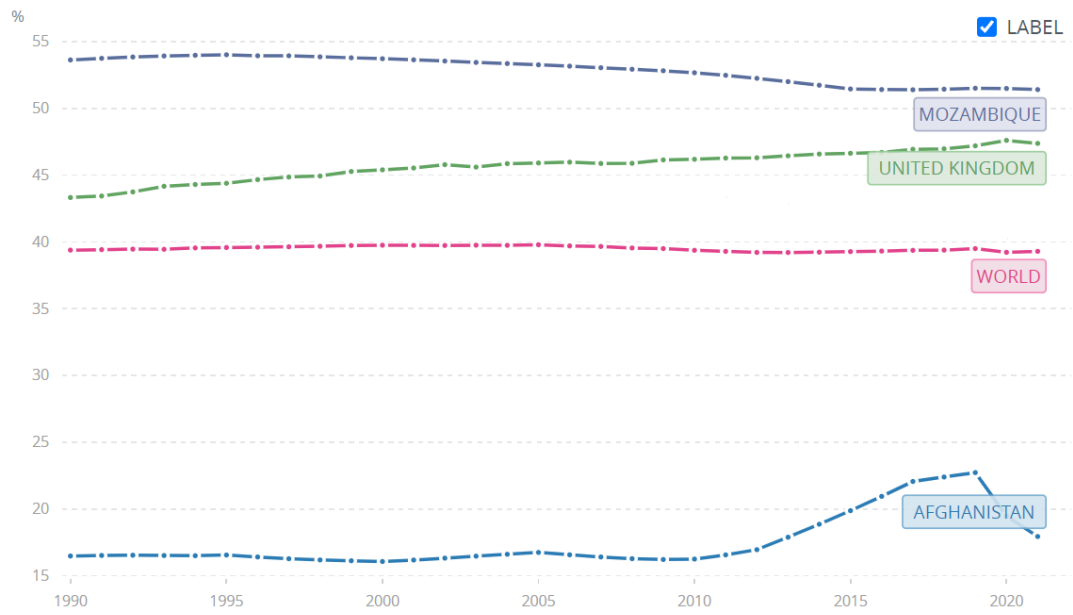
..... [1]

(c) Name two countries with a ratio of 500-2,500.

.....
..... [2]

[Total: 4]

2. A graph to show percentage of workforce as women in 3 countries.



(a) Which country has a lower percentage of women in the workforce than the world average?

..... [1]

(b) Explain **two** things that could create more equality in the workforce between men and women.

.....

.....

.....

.....

.....

.....

.....

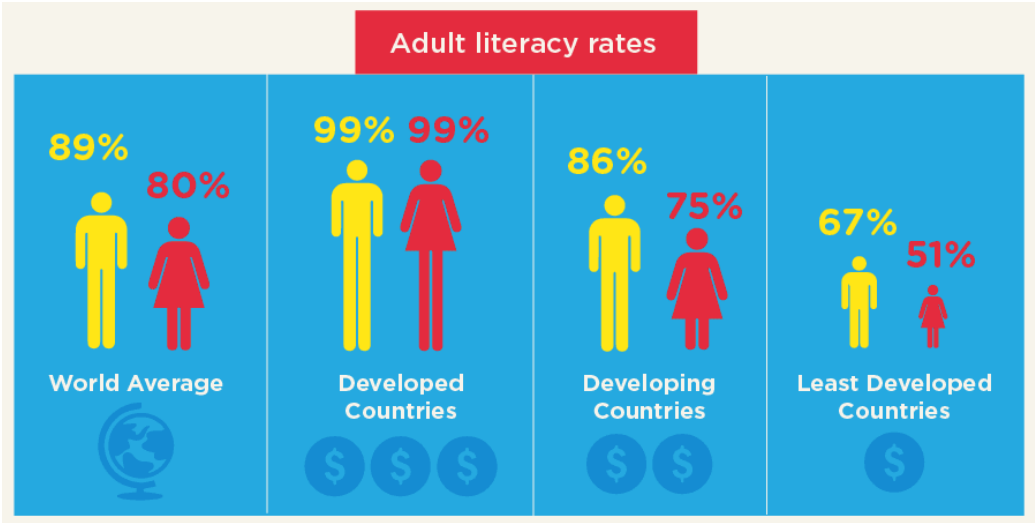
.....

.....

..... [4]

[Total: 5]

3. An infographic showing literacy rates for males and females.



(a) What percentage of women can read and write, on average, around the world?

..... [1]

(b) Explain **two** reasons why some countries have very low female literacy rates.

.....
.....
.....
.....
.....
.....
.....
.....
.....
..... [4]

[Total: 5]

